

# GCSE Mathematics

## Practice Tests: Set 11

### Paper 2H/3H (Calculator)

**Time: 1 hour 30 minutes**

You should have: Ruler graduated in centimetres and millimetres, protractor, pair of compasses, pen, HB pencil, eraser, calculator. Tracing paper may be used.

#### Instructions

- Use **black** ink or ball-point pen.
- **Fill in the boxes** at the top of this page with your name, centre number and candidate number.
- Answer **all** questions.
- Answer the questions in the spaces provided  
– *there may be more space than you need.*
- **Calculators may be used.**
- Diagrams are NOT accurately drawn, unless otherwise indicated.
- You must **show all your working out.**



#### Information

- The total mark for this paper is 80
- The marks for **each** question are shown in brackets  
– *use this as a guide as to how much time to spend on each question.*

#### Advice

- Read each question carefully before you start to answer it.
- Keep an eye on the time.
- Try to answer every question.
- Check your answers if you have time at the end.

**Answer ALL questions.**

**Write your answers in the spaces provided.**

**You must write down all the stages in your working.**

- 1** A football team played 55 games.  
Each game was won, drawn or lost.

number of games won : number of games drawn : number of games lost = 6 : 3 : 2

Work out how many more games the team won than the team lost.

.....  
**(Total for Question 1 is 3 marks)**

---

- 2** Write 720 as a product of its prime factors.  
Show your working clearly.

.....  
**(Total for Question 2 is 3 marks)**

---

- 3 Solve the inequality  $4y - 13 \leq y + 8$

.....  
**(Total for Question 3 is 2 marks)**

---

- 4 There are some ice lollies in a freezer.

The flavour of each ice lolly is banana or strawberry or mint or chocolate.

Julius takes at random an ice lolly from the freezer.

The table shows the probabilities that the flavour of the ice lolly that Julius takes is banana or strawberry or chocolate.

<b>Flavour</b>	banana	strawberry	mint	chocolate
<b>Probability</b>	0.35	0.32		0.12

Work out the probability that the flavour of the ice lolly that Julius takes is either strawberry or mint.

.....  
**(Total for Question 4 is 3 marks)**

---

- 5 Henri buys a yacht for £150 000.  
The yacht depreciates in value by 18% each year.  
Work out the value of the yacht at the end of 3 years.  
Give your answer correct to the nearest euro.

£.....

**(Total for Question 5 is 3 marks)**

---

6

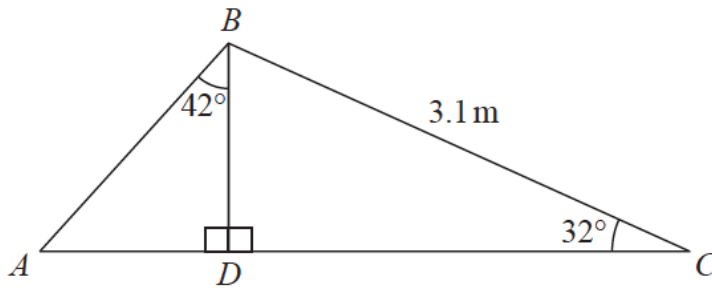


Diagram **NOT** accurately drawn

Calculate the length of  $AB$ .  
Show your working clearly.  
Give your answer correct to 3 significant figures.

..... m

**(Total for Question 6 is 5 marks)**

---

7 Lorenzo increases all the prices on his restaurant menu by 8%

**After** the increase, the price of lasagne is £9.45

Work out the price of lasagne before the increase.

£ .....

**(Total for Question 7 is 3 marks)**

---

8 There are 10 people in a lift.

These 10 people have a mean weight of 79.2 kg.

3 of these people get out of the lift.

These 3 people have a mean weight of 68 kg.

Work out the mean weight of the 7 people left in the lift.

.....kg

**(Total for Question 8 is 3 marks)**

---

- 9** Each interior angle of a regular polygon is  $162^\circ$   
Work out the number of sides the polygon has.

.....  
**(Total for Question 9 is 3 marks)**

---

- 10** Find the smallest whole number that 720 can be multiplied by to give a square number.

.....  
**(Total for Question 10 is 1 mark)**

---

- 11** Change 22 metres per second to a speed in kilometres per hour.  
Show your working clearly.

.....km/h

**(Total for Question 11 is 3 marks)**

---



12  $A, B, C$  and  $D$  are points on a circle, centre  $O$ .

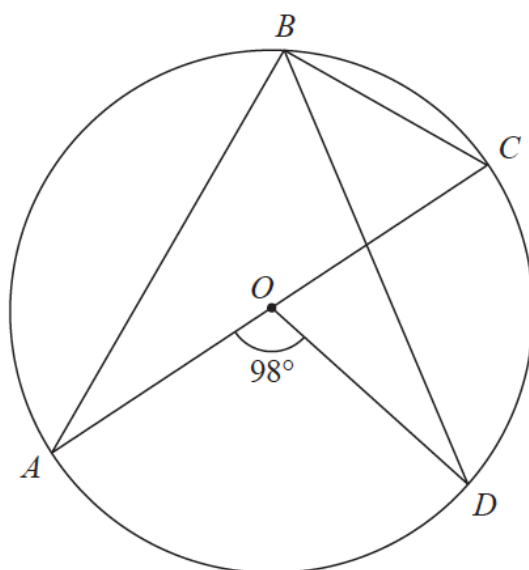


Diagram **NOT** accurately drawn

$AOC$  is a diameter of the circle.

Angle  $AOD = 98^\circ$

Work out the size of angle  $DBC$ .

Give a reason for each stage in your working.

.....<sup>o</sup>  
**(Total for Question 12 is 4 marks)**

13 The diagram shows a cylinder.

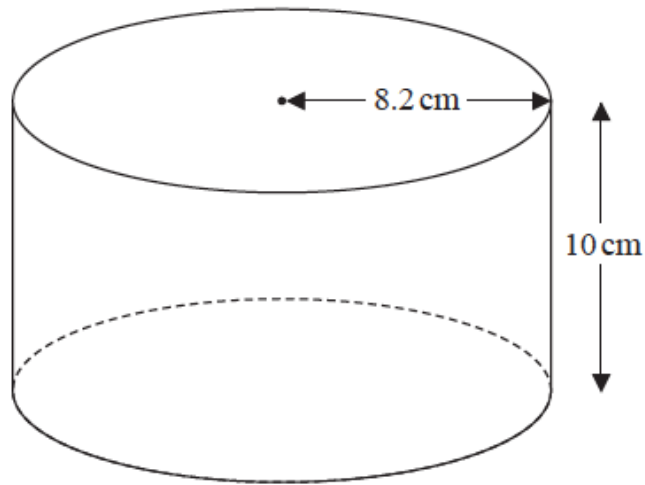


Diagram **NOT** accurately drawn

The cylinder has radius 8.2 cm and height 10 cm.

The cylinder is empty.

Pam pours 1.5 litres of water into the cylinder.

Work out the depth of the water in the cylinder.

Give your answer correct to 1 decimal place.

.....cm

**(Total for Question 13 is 3 marks)**

---

14

$$A = 3^2 \times 5^4 \times 7 \qquad B = 3^4 \times 5^3 \times 7 \times 11$$

(a) Find the highest common factor (HCF) of  $A$  and  $B$ .

.....  
(2)

(b) Find the lowest common multiple (LCM) of  $A$  and  $B$ .

.....  
(2)

**(Total for Question 14 is 4 marks)**

---

- 15 The following table gives values of  $x$  and  $y$  where  $y$  is inversely proportional to the square of  $x$ .

$x$	1.5	2	3	4
$y$	16	9	4	2.25

- (a) Find a formula for  $y$  in terms of  $x$ .

.....  
(3)

Given that  $x > 0$

- (b) find the value of  $x$  when  $y = 144$

.....  
(2)

**(Total for Question 15 is 5 marks)**

---

- 16** 3 years ago, the ratio of Tom's age to Clemmie's age was 2 : 7  
Tom is now 15 years old and Clemmie is now  $x$  years old.  
Find the value of  $x$ .

$x = \dots\dots\dots$

**(Total for Question 16 is 3 marks)**

---

17

$$x = \frac{6a}{b-a}$$

$a = 3.46$  correct to 3 significant figures.

$b = 6.3$  correct to 1 decimal place.

Work out the upper bound for the value of  $x$ .

Give your answer as a decimal correct to 3 significant figures.

Show your working clearly.

.....  
**(Total for Question 17 is 3 marks)**

---

18 The diagram shows two similar bottles, **A** and **B**.



**A**



**B**

Diagram **NOT**  
accurately drawn

Bottle **A** has surface area  $240 \text{ cm}^2$

Bottle **B** has surface area  $540 \text{ cm}^2$  and volume  $2025 \text{ cm}^3$

Work out the volume of bottle **A**.

.....  $\text{cm}^3$

**(Total for Question 18 is 3 marks)**

---

- 19 The diagram shows a sector  $OAPB$  of a circle, centre  $O$ .

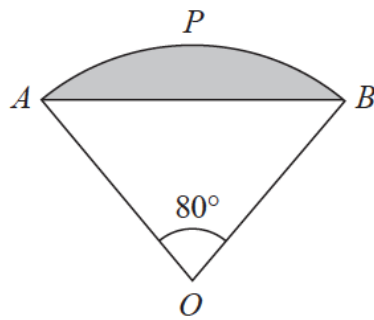


Diagram **NOT**  
accurately drawn

$AB$  is a chord of the circle.  
Angle  $AOB = 80^\circ$

The area of sector  $OAPB$  is  $\frac{25}{2}\pi \text{ cm}^2$

Work out the perimeter of the shaded segment.  
Give your answer correct to 3 significant figures.

..... cm

**(Total for Question 19 is 6 marks)**



20 The diagram shows a solid pyramid  $ABCDE$  with a horizontal base.

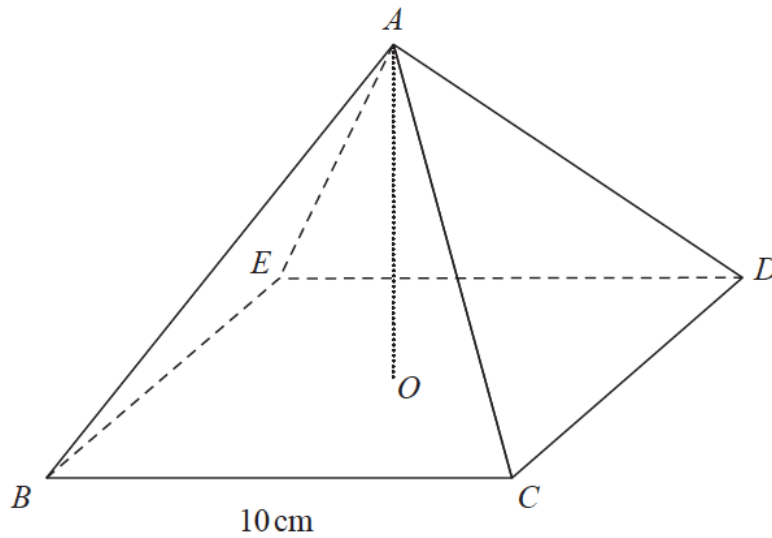


Diagram **NOT** accurately drawn

The base,  $BCDE$ , of the pyramid is a square of side 10 cm.

The vertex  $A$  of the pyramid is vertically above the centre  $O$  of the base so that  $AB = AC = AD = AE$

The **total** surface area of the pyramid is  $360 \text{ cm}^2$

Work out the size of the angle between  $AC$  and the base  $BCDE$ .

Give your answer correct to 3 significant figures.

..... °  
**(Total for Question 20 is 6 marks)**

21  $ABC$  and  $DEF$  are similar triangles.

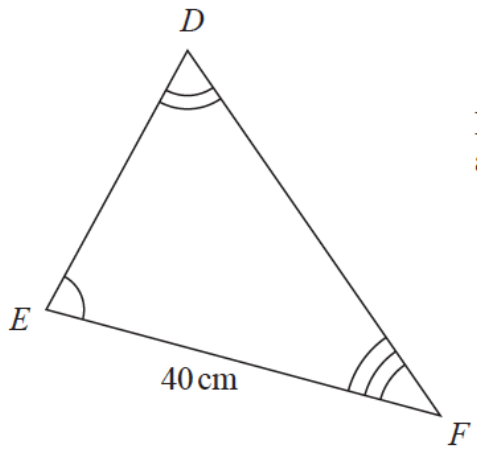
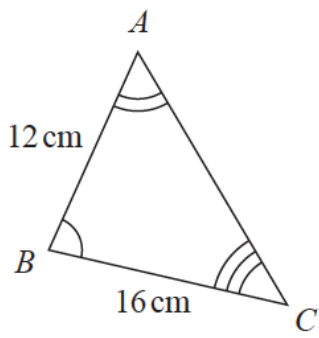


Diagram **NOT** accurately drawn

The area of triangle  $DEF$  is  $525 \text{ cm}^2$   
Find the area of triangle  $ABC$  in  $\text{m}^2$

.....  $\text{m}^2$   
(Total for Question 4 is 21 marks)

---

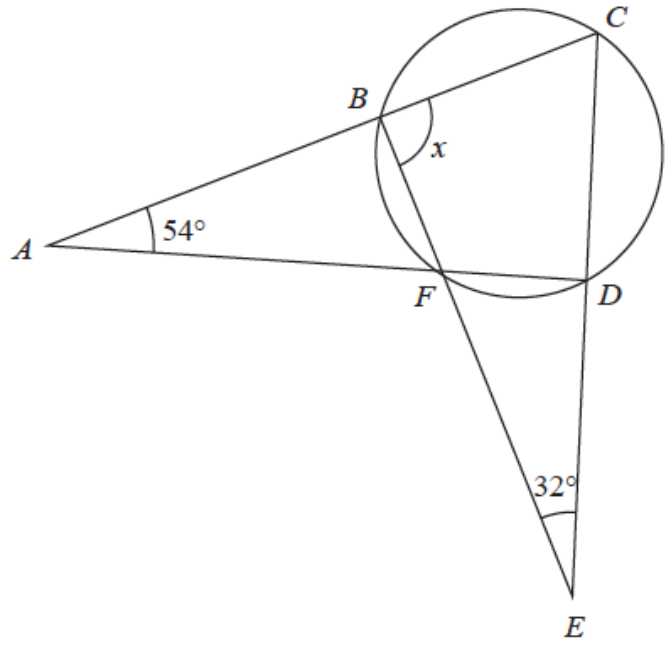


Diagram NOT accurately drawn

$B, C, D$  and  $F$  are points on a circle.  
 $ABC, AFD, BFE$  and  $CDE$  are straight lines.

Work out the size of angle  $x$ .  
Show your working clearly.

$x = \dots\dots\dots^\circ$

**(Total for Question 22 is 4 marks)**

- 23** A boat sails from point  $X$  to point  $Y$  and then to point  $Z$ .  
 $Y$  is on a bearing of  $280^\circ$  from  $X$ .  
 $Z$  is on a bearing of  $220^\circ$  from  $Y$ .

The distance from  $X$  to  $Y$  is 3.5 km.

The distance from  $Y$  to  $Z$  is 6 km.

Work out the bearing of  $Z$  from  $X$ .

Give your answer correct to 1 decimal place.

.....<sup>o</sup>  
**(Total for Question 23 is 5 marks)**

---

**TOTAL FOR PAPER IS 80 MARKS**